



SURE KEY EXAMINATIONS BOARD
PRIMARY SEVEN PLE PREPARATION EXAMINATION SET III
2022

SOCIAL STUDIES WITH RELIGIOUS EDUCATION

Time Allowed: 2 hours 15 minutes

Index No.					Personal No.		

Candidate's Name:

Candidate's Signature:

School Name:

District Name:.....

Read the following instructions carefully:

1. Do not forget to write your **school** or **district name** on this paper.
2. This paper has two sections: **A** and **B**. Section **A** has **40** questions and Section **B** has **15** questions. The paper has **16 printed pages** altogether.
3. Answer **all** questions. **All** the working for both sections **A** and **B** must be shown in the spaces provided.
4. **All** working must be done using a **blue** or **black** ball point pen or ink. Any work done in pencil will **not** be marked.
5. Unnecessary **changes** in your work and handwriting that cannot easily be read may lead to loss of marks.
6. Do not fill anything in the table indicated: "**For Examiners' Use only**" and boxes inside the question paper.

FOR EXAMINERS' USE ONLY		
Qn.No.	MARKS	EXR'S NO.
1 - 10		
11 - 20		
21 - 30		
31 - 40		
41 - 43		
44 - 46		
47 - 49		
50 - 52		
53 - 55		
TOTAL		

SECTION A: 40 MARKS

Questions 1 to 40 carry **one mark** each

1. Name the country that neighbours Tanzania in the southern direction.

.....

2. Name the best means of transport over Lake Victoria.

.....

3. Give any **one** way telephone companies in Uganda benefit from hills.

.....

4. State any **one** way bad roads affect trade activities in an area.

.....

5. Give any **one** way increase in fuel prices affects prices of goods in an area.

.....

6. Name the ministry in charge of tourism and wildlife in Uganda.

.....

7. What was the role of Bukuku at Isaza's palace?

.....

8. State any **one** reason why swamp reclamation is important in an area.

.....

9. Name the type of tax charged on locally made goods.

.....

10. What kind of vegetation grows best in salty waters of the coast?

.....



11. Name any **one** national game park famous for mountain gorillas.

.....

12. State any **one** reason why people need safe drinking water sources in their communities.

.....

.....

13. Give any **one** example of crafts made from local materials in the environment.

.....

14. State any **one** way clan leaders can promote security in a kingdom.

.....

15. State any **one** challenge government meets in providing social services.

.....

16. State any **one** reason why traders buy and sell goods in market areas.

.....

17. Give any **one** reason why children who perform well in schools need to be given gifts.

.....

The diagrams below show two flags **A** and **B**. Use them to answer questions **18** to **20**.

FLAG A



FLAG B



18. What name was given to flag **A**?

.....

19. How was flag **A** treated by Major Sidney Small on 9th October, 1962?

.....

20. Who raised flag **B** at Kololo Independence grounds on the night Uganda got independence from Britian?

.....



21. State any **one** way too much rain is dangerous to potters.

.....

22. Give any **one** reason why most people have failed to start up any business in Uganda today.

.....

23. Give the use of an anemometer in a weather station.

.....

24. State any **one** challenge people get as they carry out their daily duty of farming.


.....

25. Why is marriage introduction ceremony regarded as a social activity?

.....

.....

The picture below shows a common animal used in the desert.
Use it to answer questions **26** to **28**.



26. How is the above animal useful to the people of the desert?


.....

27. State any **one** factor that makes the above animal withstand harsh conditions in the desert.

.....

28. How important are spines on plant marked **M**?

.....

29. State any **one** advantage of having a district headquarters in an area.
.....
30. Give any **one** way the government of Uganda is promoting the provision of medical services.
.....

31. Give any **one** way of fighting corruption in our society.
.....
32. State any **one** reason why family planning services is good in a country.
.....
33. In which **one** way are petrol stations important to people who own vehicles?
.....
.....
34. Why is Benidicto Kiwanuka remembered in the history of Uganda?
.....
35. How did the Berlin Conference of 1884 to 1885 unite European powers?
.....
.....

For each of the questions **36** to **40**, answer **Either** the Christian **OR** Islamic questions but **not** both. No **marks** will be awarded to a candidate who attempts both alternatives in **a particular number**.

36. **EITHER:**

For how many days did Jesus fast in the wilderness?

.....

OR:

Name the special prayer Muslims say after Aswir prayer during the month of Ramadhan.

.....

37. **EITHER:**

Which important event took place on Palm Sunday?

.....

OR:

Which important event took place on Hejira?

.....

38. **EITHER:**

What was the work of Moses before he was called by God?

.....

OR:

What was the work of Prophet Musa before he was called by Allah?

.....

39. **EITHER:**

State any **one** way Christians use water to serve God.

.....

OR:

State any **one** way Moslems use water to serve Allah.

.....

40. **For Both:**

How is Adam related to the story of creation?

.....



SECTION B: 60 MARKS

Questions **41** to **55** carry four marks each.

41. a) Who was the leader of IBEACO in Uganda?

.....

b) Give any **two** reasons why colonialists started trading companies in Africa.

i)

ii)

c) Mention any **one** problem that was faced by trading companies in East Africa.

.....

42. a) Name the Ugandan politician who formed the first political party.

.....

b) State any **two** difficulties faced by nationalists during the struggle of independence of their countries.

i)

ii)

- c) Mention any **one** event that took place on 9th October, 1962 to show that Uganda had acquired freedom from colonialism.
-

43. The table below shows rainfall and temperature recorded in a certain region. Study it and answer questions that follow.

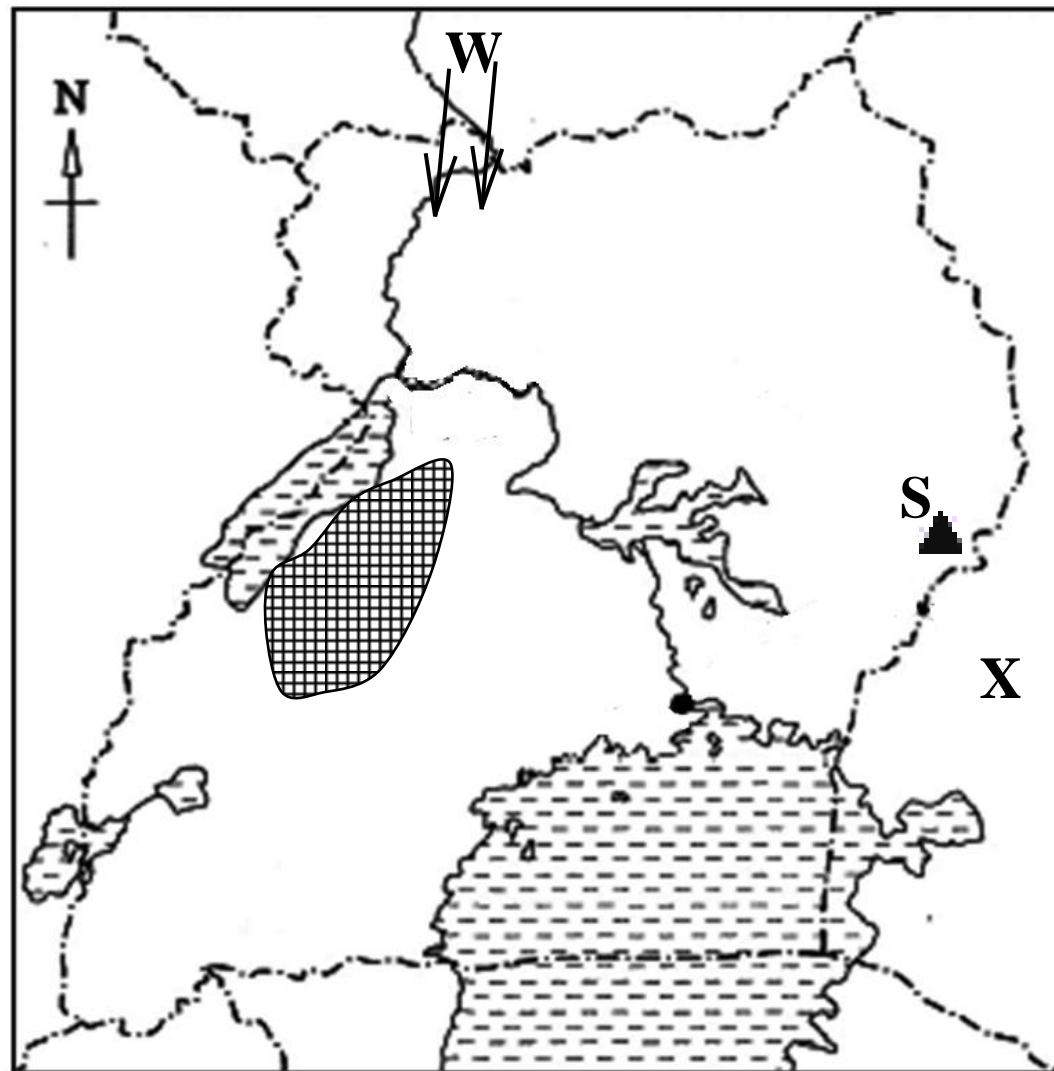
Months	J	F	M	A	M	J	J	A	S	O	N	D
Temperature (⁰ c)	21	24	28	31	31	28	36	25	26	27	24	22
Rainfall (mm)	0	0	3	11	69	117	206	310	142	13	0	0

- a) What type of climate is shown on the table?
.....
- b) Name the month in which the lowest temperature was recorded.
.....
- c) In which month was the highest amount of rainfall received?
.....
- d) State any **one** economic activity that is carried out by people in the above region.
.....



44. a) How are thieves dangerous to traders in an area?
.....
- b) State any **two** factors that attract business people in an area.
- i)
- ii)
- c) Give any **one** challenge traders selling similar goods face in an area.
.....

45. Study the sketch map of Uganda below carefully and use it to answer the questions that follow.



- a) Name any **one** tribe among the ethnic group that entered Uganda using route **W**.
-
- b) State any **one** factor that leads to population increase in the shaded region on the map.
-
- c) How is the formation of the Drakensberg mountains similar to that of mountain marked **S**?
-
- d) Why should Uganda keep a good international relationship with country **X**?
-
-

46. a) What word is used to refer to a group of people who share similar origin and speak related languages?

 b) State any **two** factors that show that the Bagishu and Baganda are of the same origin.
 i)
 ii)
 c) Why were the Bantu able to form kingdoms?



47. Match minerals in List **A** with the places where they are mined in List **B**.

List A	List B
Cobalt	Kabale
Salt	Kasese
Wolfram	Tororo
Phosphates	Lake Katwe

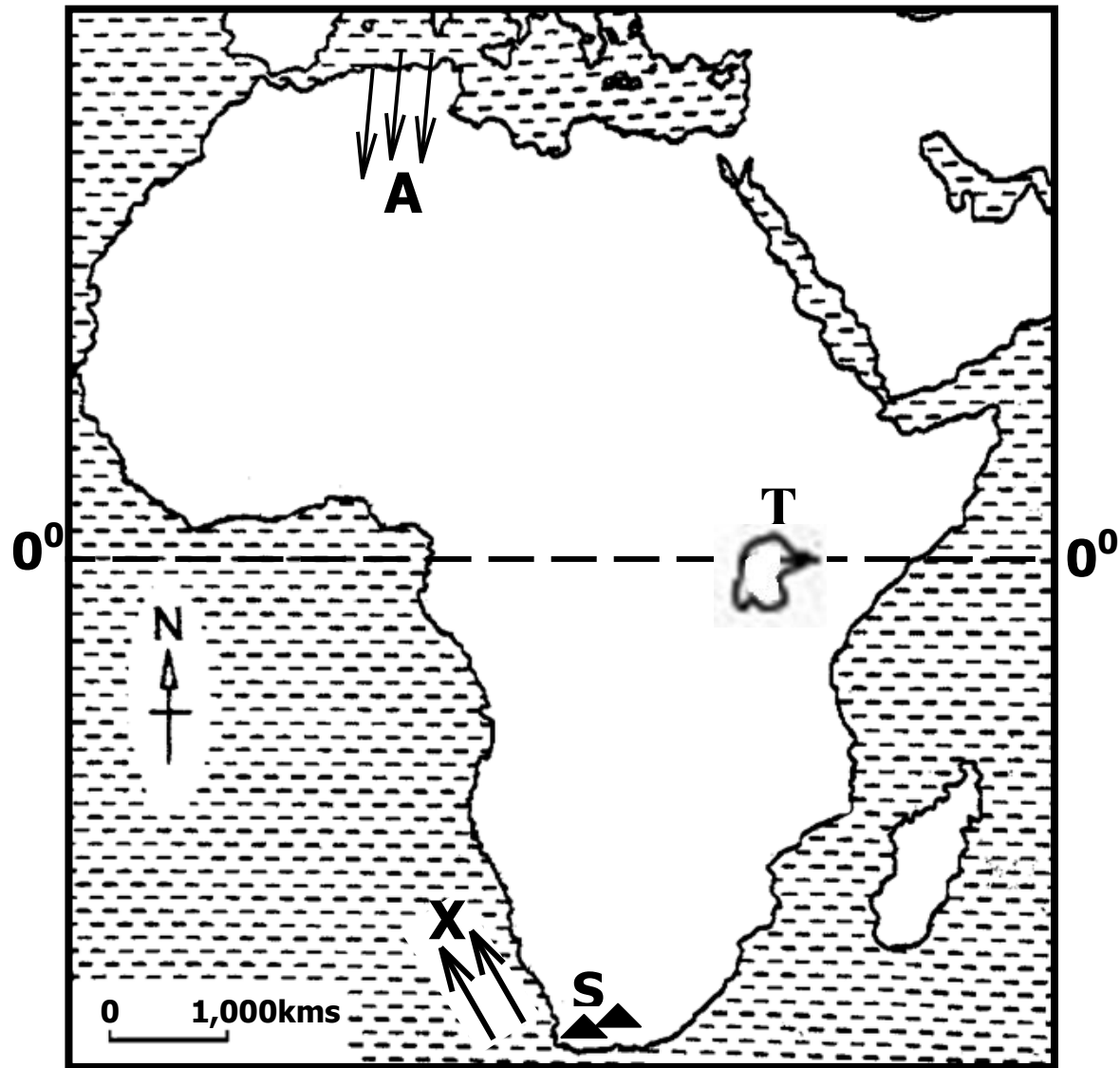
- a) Cobalt
 b) Salt
 c) Wolfram
 d) Phosphate
48. a) Who heads the judiciary of the Uganda government by title of office?

 b) State any **two** challenges facing the judicial organ in Uganda today.
 i)
 ii)

c) What is the major role of the judiciary?

.....

49. Study the sketch map of Africa below and use it to answer the questions that follow.



a) Name mountain ranges marked **S**.

.....

b) Why don't winds marked **A** form rainfall in to area they blow?

.....

.....

c) How do ocean currents marked **X** influence the climate of the nearby areas in Africa?

.....

d) Why was John Speke so interested in finding lake marked **T**?

.....

.....



50. a) Name the largest regional economic grouping in Africa.

 b) State any **two** ways in which the above regional economic grouping benefits its member states.
 i)
 ii)
 c) How is Lusaka city important to the above named regional economic grouping?

For each of the questions **51** to **55**, answer **EITHER** Christian **OR** Islamic questions but **not** both. **No mark** will be awarded to a candidate who attempts both alternatives in **a particular number**.

51. **EITHER:**

- a) What does the word 'seed' mean in the parable of the sower?

 b) State any **two** reasons why some Christians fail to practice what has been preached to them.
 i)
 ii)
 c) How do priests help Christians to practice what has been preached?

OR:

- a) What does the Islamic word "Khutuba" mean?

 b) State any **two** reasons why some Moslems fail to practice what has been preached to them.
 i)
 ii)

c) State any **one** way Imams help Moslems to fear Allah.

.....

52. **EITHER:**

Match the days of the Christian calendar in list **A** with their meanings in list **B**.

List A

Ascension Day.
Holy Thursday
Christmas day
Ash Wednesday

List B

Day Jesus was born.
Day Jesus went to heaven.
Marks beginning of fasting.
Day Jesus served the last supper to the apostles

- a) Ascension Day.
- b) Holy Thursday
- c) Christmas day
- d) Ash Wednesday

OR:

Match the information in list **A** with that in list **B**.

List A

Miraj
Eid-el-fitr
Umra
Isra

List B

celebration to mark end of Ramadhan.
Muhammad's night journey from Mecca to Jerusalem.
Muhammad's night journey from earth to heaven.
Muslim's journey to Mecca to make minor Hajji.

- a) Miraj
- b) Eid-el-fitr
- c) Umra
- d) Isra



53. **EITHER:**

- a) How did the death of Jesus Christ affect Christians?
.....
- b) Name the first **two** people to see the empty tomb of Jesus.
 - i)
 - ii)
- c) Why was Simon Peter able to preach the word of God?
.....

OR:

- a) Apart from Abu baker, name any **two** other caliphs of Prophet Muhammad.
 - i)
 - ii)
- b) Mention **two** reasons why Abu baker was chosen as the first caliph.
 - i)
 - ii)

54. **EITHER:**

“Let the little children come to me”.

- a) Who said those words?
.....
- b) To whom did he say them to?
.....
- c) What **two** lessons do you learn from the Bible quotation above?
 - i)
 - ii)

OR:

“Whoever does not show mercy to our young ones, or acknowledge the rights of our elders, is not one of us.”

a) Who said the above words?

.....

b) Give any **one** way of caring for children in Islam.

.....

c) Mention any **two** benefits of following Prophet Muhammad’s teaching and sayings to a Moslem?

i)

ii)

55. **FOR BOTH:**

a) Who is a martyr?

.....

.....

b) Give any **one** lesson Christians and Moslems learn from martyrs.

.....

c) State any **one** reason why Christians and Moslems go for pilgrimage.

i)

ii)

